

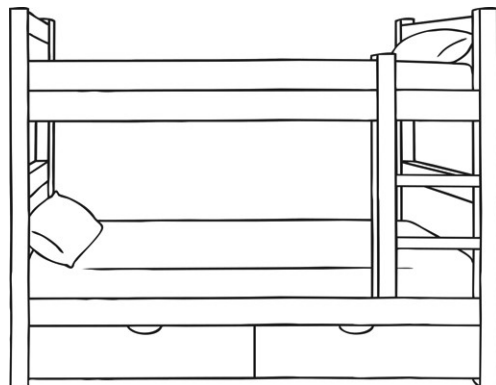
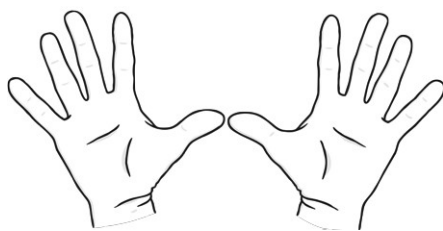


# Measuring Lengths and Heights

We are beginning to measure lengths and heights.

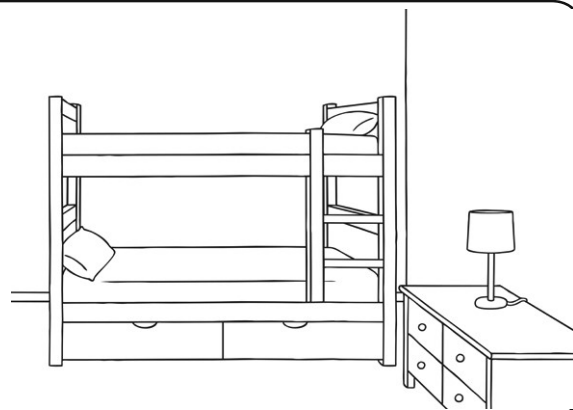
Measure your bed using your hands.

My bed is \_\_\_\_\_ hands long.



Measure your bedroom using your feet.

My bedroom is \_\_\_\_\_ feet long.



What else can you measure using your feet?

Draw what you have measured here and write how many feet it took to measure it.

\_\_\_\_\_ feet